

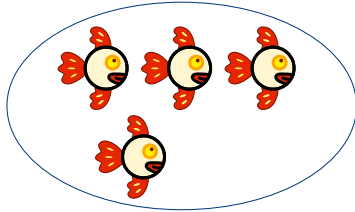


Name:

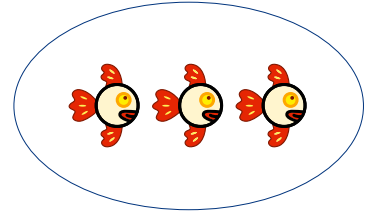
Die Kraft der Fünf

1. „Immer fünf“ – Ergänze die Zahl in der Rechenaufgabe und male die fehlenden Fische dazu.

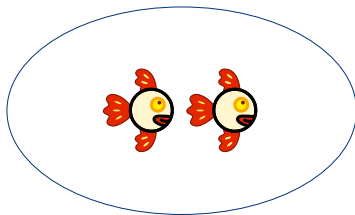
$4 + \underline{\quad} = 5$



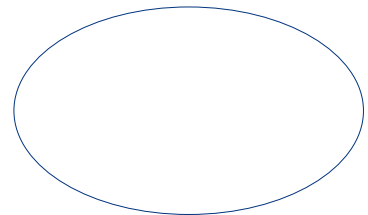
$3 + \underline{\quad} = 5$



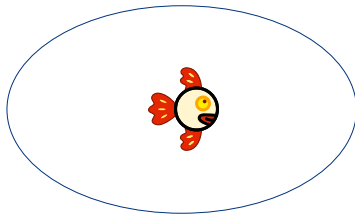
$2 + \underline{\quad} = 5$



$0 + \underline{\quad} = 5$



$1 + \underline{\quad} = 5$



2. Übung für Matheprofis

$3 + \underline{\quad} = 5$

$4 + \underline{\quad} = 5$

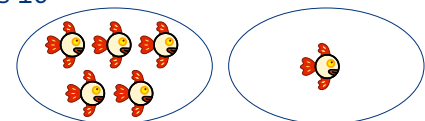
$0 + \underline{\quad} = 5$

$2 + \underline{\quad} = 5$

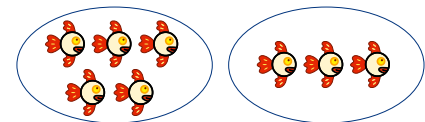
$1 + \underline{\quad} = 5$

3. Zahlenraum bis 10

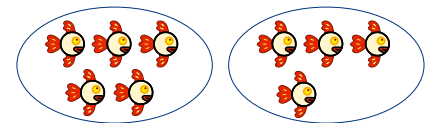
$5 + 1 = \underline{\quad}$



$5 + 3 = \underline{\quad}$



$5 + 4 = \underline{\quad}$



$5 + 2 = \underline{\quad}$

